

REASONING

3ER14

First name _____

Last name _____

School _____

Class _____

Date of birth

Date of test

Total score (maximum 20)




117606



Llywodraeth Cymru
Welsh Government

1



2, 3, 5

Ffion jumps forward 2, 3 and 5, in any order.

Show all the **different** ways she can do this.

One is done for you.



Start



Start



Start



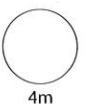
Start




Start



Start




2




Fred jumps forward 3 and 7, in any order.

How many **different** ways can he jump to 10?



3



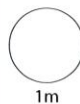
Flo jumps to 10 using jumps of the **same size**.

Show **different** ways she can do this.

 **Start**



 **Start**




TOTAL



4

Flo, Fred and Ffion eat spiders.



Flo



Fred

I eat
2 more
than Flo.



Ffion

I eat
2 more
than Fred.

Flo, Fred and Ffion eat 30 spiders altogether.

How many spiders does each one eat?



Flo eats

spiders.

Fred eats

spiders.

Ffion eats

spiders.

Stop here


1



7p




3p




p



9p



p



14p



4p



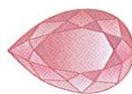
8p




p



p



7p



10p

2



2p each



3p each



5p each



has 30p.

She buys **four**  and **four** 

How many  can she buy?



2m



has 40p.

He wants an **equal number** of ,  and 

How many of each jewel can he buy?


 of each jewel

2m

TOTAL

7m

- 3 The children have six boxes.



10 **small** jewels fit in each box

or

5 **big** jewels fit in each box.



has 23 **small** jewels and 10 **big** jewels.



has 17 **small** jewels and 9 **big** jewels.

Will **all** their jewels fit in the six boxes?

Show how you work it out.

